

SKILLS LIST and SAMPLE TEST ITEMS

FOR

PRACTICE TEST FOR SCIENCE, GRADE 4 - FORM B

(Test items developed for skills measured in Stanford9)*

Skills

- | | |
|--------------------------------------|-------------------------------|
| 1.0 Earth and Space Science | 6.0 Using Information |
| 1.1 Understanding Properties/Sources | 6.1 Earth and Space Science |
| 2.0 Physical Science | 6.2 Physical Science |
| 2.1 Understanding Properties | 6.3 Life Science |
| 3.0 Life Science | 6.4 Using Evidence and Models |
| 3.1 Understanding Characteristics | 6.5 Analyze Patterns |
| 4.0 Related Processes | 6.6 Comparing Form/Function |
| 4.1 Using Evidence and Models | |
| 4.2 Analyze Patterns | |
| 4.3 Comparing Form/Function | |
| 5.0 Thinking Skills | |
| 5.1 Understanding Properties/Sources | |
| 5.2 Understanding Properties | |
| 5.3 Understanding Characteristics | |
| 5.4 Using Evidence and Models | |
| 5.5 Analyze Patterns | |
| 5.6 Comparing Form/Function | |

Number of questions: 40

Number of pages: 13

Approximate testing time: 25 minutes

(c) EPES TESTING, INC.


(OVER)

*The Stanford9 is published by Harcourt Brace Educational Measurement which does not endorse or attest to the accuracy of this practice test.


Stanford9 PRACTICE TEST IN SCIENCE - GRADE 4 - FORM B

DIRECTIONS: Read each question and choose the best answer.


SAMPLE




Which picture would probably make both of the shadows above?




A.



B.




C.



D.

1. Which plant is not suited to a desert environment?



A.



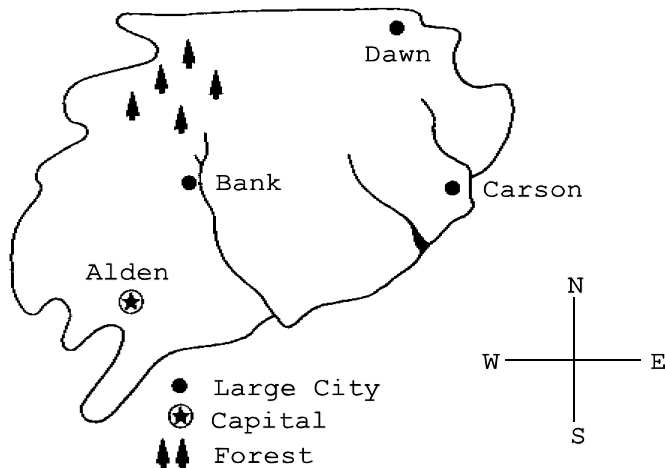
B.



C.



D.



2. Which city is nearest a forest?

A. Alden

B. Dawn

C. Carson

D. Bank