

*SKILLS LIST and SAMPLE TEST ITEMS*

*FOR*

**PRACTICE TEST FOR MATHEMATICS, GRADE 1**

*(Test items developed for skills measured in Stanford9\*)*

---

*Skills*

- 1.0 Computation
  - 1.1 Addition of Whole Numbers in Context
  - 1.2 Subtraction of Whole Numbers in Context
- 2.0 Number Facts
  - 2.1 Addition Facts
  - 2.2 Subtraction Facts
  - 2.3 Adding Whole Numbers
  - 2.4 Subtracting Whole Numbers
- 3.0 Problem Solving
  - 3.1 Concepts of Whole Number Computation
  - 3.2 Number Sense and Numeration
  - 3.3 Geometry
  - 3.4 Measurement
  - 3.5 Statistics/Probability
  - 3.6 Fraction/Decimal
  - 3.7 Patterns/Relationships
  - 3.8 Problem Solving

---

Number of questions: 69

Number of pages: SE= 18; TE= 19

Approximate testing time: 80 minutes

© EPES TESTING, INC.

(OVER)

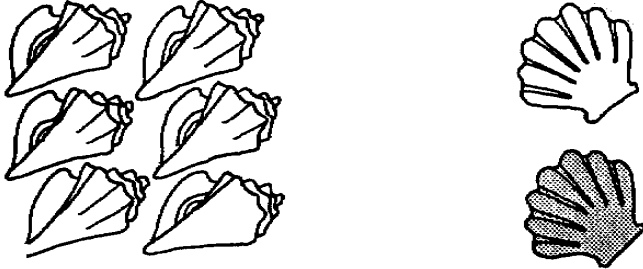
\*The Stanford9 is published by Harcourt Brace Educational Measurement which does not endorse or attest to the accuracy of this practice test.

Stanford9 MATH PRACTICE TEST - GRADE 1  
TEACHER EDITION

**Teacher says:** Look at Sample A. Morgan found six shells at the beach. His sister found two shells. How many shells did they find in all? The answer choices are six shells, two shells, eight shells, and NH for not here, meaning the correct answer is not here. Fill in the circle by your answer.

SAMPLE A

Morgan found six shells and his sister found two shells. How many shells did they find in all?



F 6                      F 2                      F 8                      F NH

**Teacher says:** You should have selected filled in the circle by the 8. Eight is the correct answer. Six plus two equals eight.

**Teacher says:** Look at Sample B. How much is seven minus two? The answer choices are three, four, five, and NH for not here. Fill in the circle by your answer.

SAMPLE B

$7 - 2 = G$

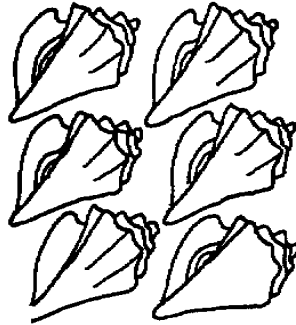
F 3                      F 4                      F 5                      F NH

**Teacher says:** Seven minus two is five. You should have filled in the circle by the 5, because seven minus two equals five.

**Teacher says:** Now we will work some more questions. Listen carefully as I read each question. I will only read it once. You must choose only one answer for each question. Use your scratch paper for any figuring you need to do. Do not write on the pictures.

Stanford9 MATH PRACTICE TEST - GRADE 1  
STUDENT EDITION

SAMPLE A



F 6

F 2

F 8

F NH

SAMPLE B



$$7 - 2 = G$$

F 3

F 4

F 5

F NH



1. F

F

F

F NH