

SKILLS LIST and SAMPLE TEST ITEMS

FOR

PRACTICE TEST FOR ENVIRONMENT, GRADE 2

(Test items developed for skills measured in STANFORD10)

Skills

- | | |
|---|--|
| 1.0 History | 5.0 Life Science |
| 1.1 Individuals/Groups/
Institutions | 5.1 Characteristics of Organisms |
| 2.0 Geography | 6.0 Earth Science |
| 2.1 Human/Environment | 6.1 Understanding Properties/
Sources |
| 3.0 Political Science | 7.0 Physical Science |
| 3.1 Government and Society | 7.1 Properties of Objects/
Materials |
| 4.0 Economics | 8.0 Related Processes |
| 4.1 Economic Concepts | 8.1 Scientific Investigation |

Number of questions: 40
Number of pages: TE=7; SE=11
Approximate testing time: 30 minutes

(c) EPES TESTING, INC.

(OVER)

STANFORD10 PRACTICE TEST IN ENVIRONMENT - GRADE 2
TEACHER DIRECTIONS - FORM A

Teacher Says: Look at Sample A on page one. Look at the different pictures. Which picture shows a symbol that is used to celebrate our country's independence? Mark the circle under the correct picture.

Wait while students choose the answer.

Which circle did you mark? Yes. That's right. You should have filled in the first circle under the picture of the fireworks. We use fireworks to celebrate our country's independence on the Fourth of July. Do you have any questions?

Look at Sample B. In Sample B, which picture shows an animal that usually lives in a cold climate. Is it the elephant, the tiger, or the polar bear? Mark the circle under the correct picture.

Wait while students choose the answer.

Which picture did you choose? Yes. That's right. You should have filled in the circle below the polar bear, because the polar bear is the animal that usually lives in a cold climate. Do you have any questions?

Now we will do some more problems like these. Look at the pictures in each row and listen carefully as I read each question. Then mark the circle under the correct picture.


Look at number 1. Find the picture that shows something that is made from a natural resource. Is it the kite, the clock, or the table? Mark the circle under the correct picture.

Go to number 2. Which picture shows someone who lives in a cold climate? Mark the circle under the correct picture.


Move to number 3. Which pictures shows what a legislator might look like in his office? Mark the circle under the picture that shows a legislator who makes laws for our country.

STANFORD10 PRACTICE TEST IN ENVIRONMENT - GRADE 2
STUDENT EDITION - FORM A

SAMPLE A



(A)




(B)




(C)


SAMPLE B



(A)

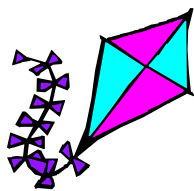


(B)




(C)

1.



(A)




(B)



(C)

2.



(A)



(B)



(C)