

SKILLS LIST and SAMPLE TEST ITEMS

FOR

PRACTICE TEST FOR SOCIAL STUDIES, GRADE 2

(Test items developed for skills measured in ITBS03)

Skills

- | | |
|-----------------------|------------------------|
| 1.0 History | 4.0 Government |
| 1.1 Culture | 4.1 Social Structure |
| 1.2 People | 4.2 Rules |
| 1.3 Chronology | 4.3 Citizenship |
| 2.0 Geography | 5.0 Maps/Diagrams |
| 2.1 Land | 5.1 Locate Information |
| 2.2 Human/Environment | 5.2 Interpretation |
| 3.0 Economics | 6.0 Thinking Skills |
| 3.1 Work | 6.1 Social Studies |
| 3.2 Needs/Wants | 6.2 Maps/Diagrams |
| 3.3 Technology | |
| 3.4 Interdependence | |

Number of questions: 45

Number of pages: TE=7; SE=13

Approximate testing time: 42 minutes

(c) EPES TESTING, INC.

(OVER)

ITBS03 PRACTICE TEST IN SOCIAL STUDIES - GRADE 2
TEACHER DIRECTIONS - FORM A

Teacher says: Look at Sample A on page 1. Look at the different pictures. Which picture shows a symbol that is used to celebrate our country's independence? Fill in the circle under the correct picture.

Wait while students choose the answer.

Which circle did you mark? Yes. That's right. You should have filled in the first circle under the picture of the fireworks. We use fireworks to celebrate our country's independence on the Fourth of July. Do you have any questions?

Look at Number 1. Which picture shows someone who lives in a cold climate? Fill in the circle under the picture that shows someone who lives in a cold climate.

Look at Number 2. Which pictures shows what a legislator might look like in his office? Fill in the circle under the picture that shows a legislator in his office.

Look at Number 3. Look at the three pictures. Which picture shows two people walking together in wet weather? Fill in the circle under the picture of two people walking together in wet weather.

Teacher says: Go to page 2. Look at Number 4. Look at the three pictures. Which one shows something that people must obey and that helps with traffic? Fill in the picture that shows something that people must obey and that helps with traffic.

Look at Number 5. Look at the three pictures. Which picture shows something that is a symbol of the independence of the United States? Fill in the circle under the picture that is a symbol of the independence of the United States.


Look at Number 6. Look at the three pictures. Which picture shows someone doing something to help the environment? Fill in the circle under the picture that shows someone doing something to help the environment.

ITBS03 PRACTICE TEST IN SOCIAL STUDIES - GRADE 2
STUDENT EDITION - FORM A

SAMPLE A



(A)




(B)



(C)


1.



(A)



(B)



(C)

2.



(A)



(B)



(C)

3.



(A)



(B)



(C)