

SKILLS LIST and SAMPLE TEST ITEMS

FOR

PRACTICE TEST FOR SCIENCE, GRADE 3

(Test items developed for skills measured in ITBS FORM B)*

Skills

1.0 Life Science

- 1.1 Explain
- 1.2 Hypothesis
- 1.3 Classify

2.0 Earth and Space Science

- 2.1 Explain
- 2.2 Infer
- 2.3 Hypothesis
- 2.4 Classify

3.0 Physical Science

- 3.1 Explain
 - 3.2 Infer
 - 3.3 Hypothesis
 - 3.4 Classify
-

Number of questions: 30

Number of pages: 7

Approximate testing time: 30 minutes

(c) EPES TESTING, INC.

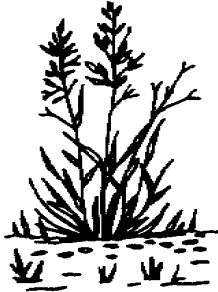
(OVER)

ITBS SCIENCE PRACTICE TEST - GRADE 3 - FORM B

1. A producer makes its own food. A consumer eats other living things. Which of the following pictures represents a producer?



A.



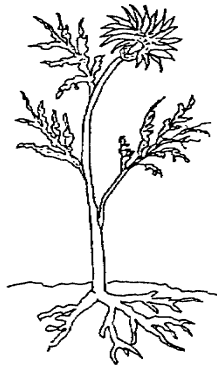
B.



C.




D.



2. What is the last thing that is produced on a fruit tree?

A. the roots B. the bloom C. the stem D. the fruit

3. Which of these is a hot, dry climate?



A.



C.



B.



D.