

*SKILLS LIST and SAMPLE TEST ITEMS*

*FOR*

**PRACTICE TEST FOR SCIENCE, GRADE 2**

*(Test items developed for skills measured in ITBS FORM B\*)*

---

*Skills*

1.0 Science

1.1 Principles of Science

---

Number of questions: 31

Number of pages: TE=10; SE=8

Approximate testing time: 25 minutes

**(c) EPES TESTING, INC.**

(OVER)

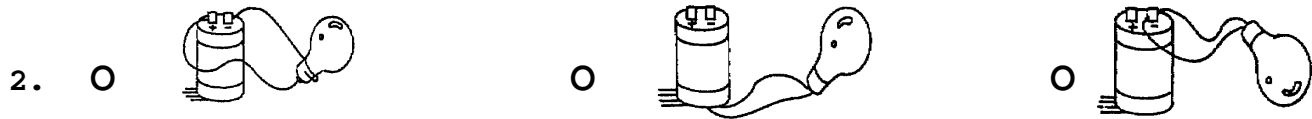
\*The Iowa Test of Basic Skills is published by The Riverside Publishing Company which does not endorse or attest to the accuracy of this practice test.

ITBS SCIENCE PRACTICE TEST - GRADE 2 - FORM B  
TEACHER EDITION

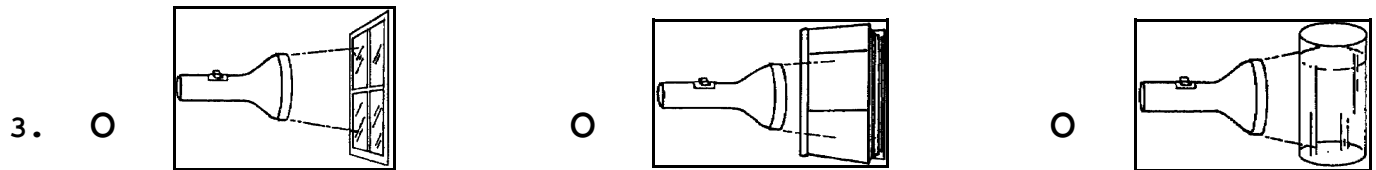
Teacher says: Move down to Number 1. Look at the three parts of a plant. Find the part that gets water from the soil.



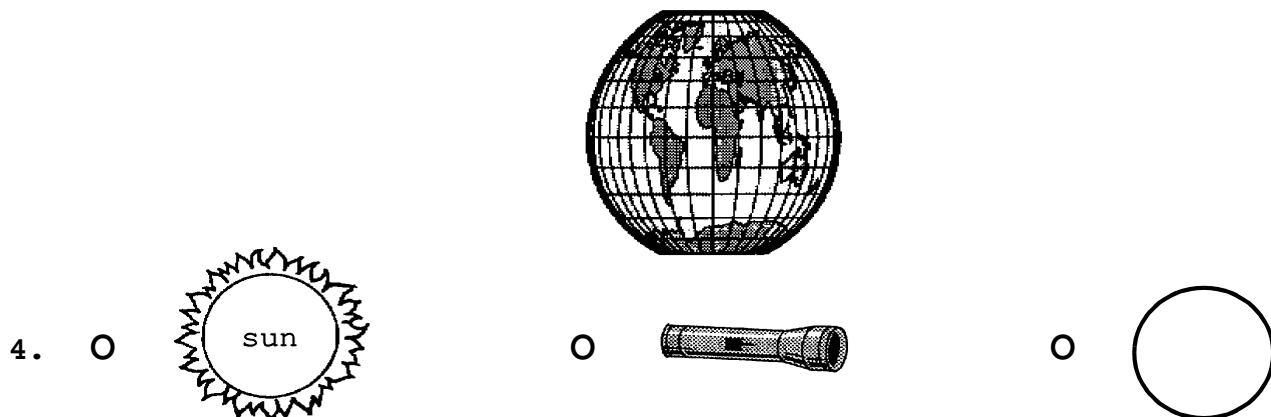
Teacher says: Move down to Number 2. Choose the circuit that is complete and would make the lightbulb light up.



Teacher says: Move down to Number 3. Find the picture that would make the darkest shadow.



Teacher says: Move down to Number 4. The first picture shows the earth. Look at the other three pictures. Find the picture that shows what controls the seasons on the earth.



ITBS SCIENCE PRACTICE TEST - GRADE 2 - FORM B  
STUDENT EDITION

