

SKILLS LIST and SAMPLE TEST ITEMS

FOR

PRACTICE TEST FOR SCIENCE, GRADE 1

(Test items developed for skills measured in ITBS FORM B)*

Skills

1.0 Science

1.1 Principles of Science

Number of questions: 31

Number of pages: TE=9; SE=9



Approximate testing time: 25 minutes

(c) EPES TESTING, INC.

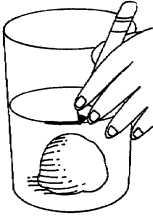
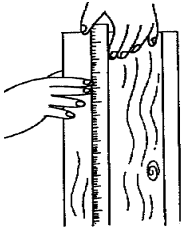
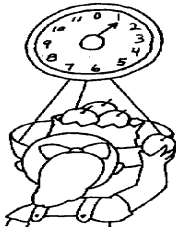
(OVER)

ITBS PRACTICE TEST FOR SCIENCE - GRADE 1 - FORM B
TEACHER EDITION

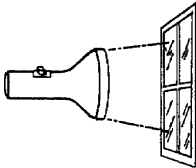
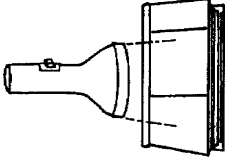
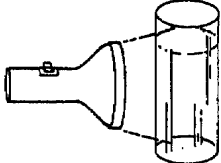
Teacher says: Move down to Number 1. Which picture shows a food that comes from a plant?

1.   

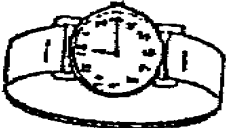


Teacher says: Move down to Number 2. Find the picture that shows how a person would measure an object's weight.

2.   

Teacher says: Move down to Number 3. Marcy is conducting an experiment to find out which thing will not let light pass through it. Look at the three pictures. Which picture would not let light pass through it?

3.   

Teacher says: Move down to Number 4. Which of these is found in nature? Find the picture that is found in nature.

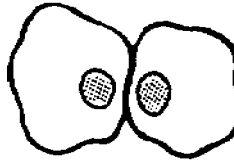
4.   

Teacher says: Move down to Number 5. Which one is a healthy food?


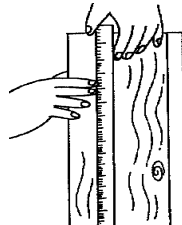
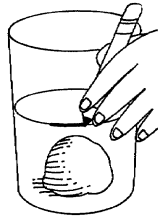
5.   

ITBS PRACTICE TEST FOR SCIENCE - GRADE 1 - FORM B
STUDENT EDITION

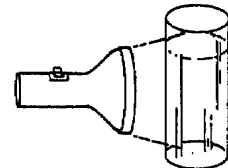
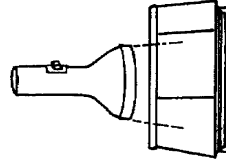
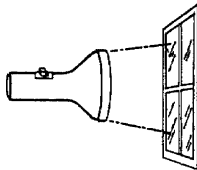
1.




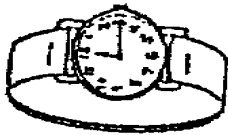
2.




3.






4.



5.



6.



7.

