

SKILLS LIST and SAMPLE TEST ITEMS

FOR

PRACTICE TEST FOR MATHEMATICS, KINDERGARTEN - FORM B

(Test items developed for skills measured in ITBS)*

Skills

1.0 Mathematics Concepts

- 1.1 Numeration and Number Systems
- 1.2 Whole Numbers
- 1.3 Geometry
- 1.4 Measurement
- 1.5 Fractions
- 1.6 Currency
- 1.7 Number Sentences

2.0 Problem Solving

- 2.1 Solve Word Problems
- 2.2 Compare Amounts

Number of questions: 35

Number of pages: TE=11; SE=8

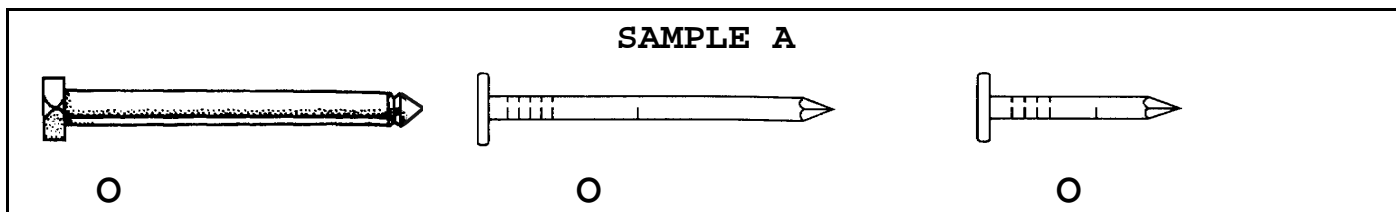
Approximate testing time: 70 minutes

(c) EPES TESTING, INC.

(OVER)

ITBS PRACTICE TEST IN MATHEMATICS - FORM B -KINDERGARTEN
TEACHER EDITION

Teacher says: Look at the pictures. Which one is the shortest? Fill in the circle under the one that is the shortest.




Teacher says: You should have filled in the circle under the last picture. It is the shortest one in the group. Now we will do some more problems like this one. Listen to the directions and choose the best answer.

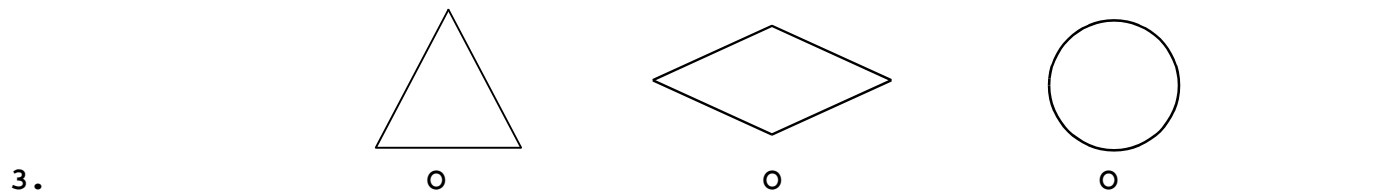
Teacher says: Move down to the next row. Look at the balls. Which ball has the biggest number on it? Fill in the circle under the ball with the largest number on it.



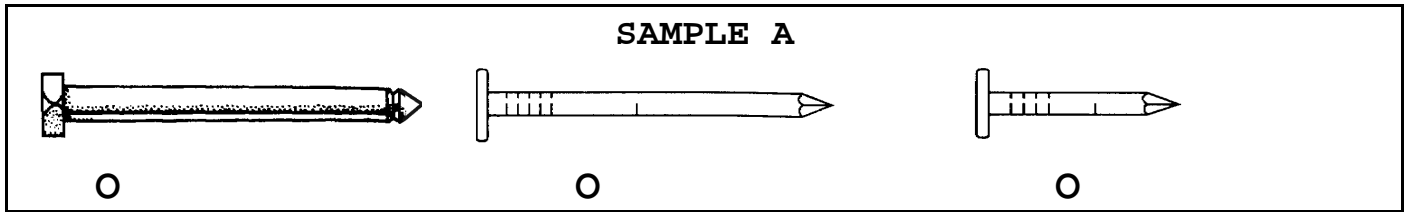
Teacher says: Move down to the next row. If you were counting, which number would come just after 11? Fill in the circle under the number that comes just after 11.



Teacher says: Move down to the next row. Look at the shapes in the row. Which shape is most likely to roll? Fill in the circle under the shape that would roll.



ITBS PRACTICE TEST IN MATHEMATICS - FORM B -KINDERGARTEN
STUDENT EDITION



13

85

41

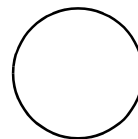
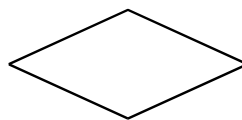
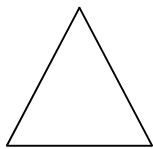
1.

10

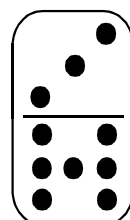
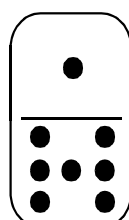
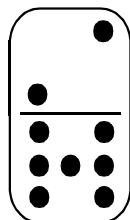
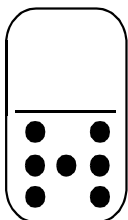
12

13



2.



3.



4.



5.