

*SKILLS LIST and SAMPLE TEST ITEMS*

*FOR*

**PRACTICE TEST FOR MATHEMATICS, KINDERGARTEN**

*(Test items developed for skills measured in ITBS\*)*

---

*Skills*

- 1.0 Mathematics Concepts
  - 1.1 Numeration and Number Systems
  - 1.2 Whole Numbers
  - 1.3 Geometry
  - 1.4 Measurement
  - 1.5 Fractions
  - 1.6 Currency
  - 1.7 Number Sentences
- 2.0 Problem Solving
  - 2.1 Solve Word Problems
  - 2.2 Compare Amounts

---

Number of questions: 35

Number of pages: TE=12; SE=9

Approximate testing time: 25 minutes

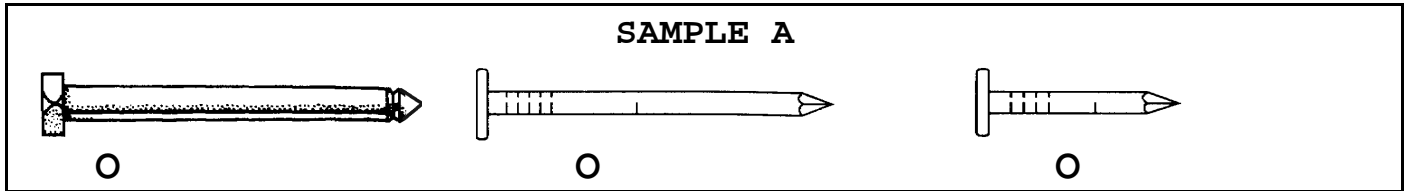
(C) EPES TESTING, INC.

(OVER)

\*The Iowa Test of Basic Skills is published by The Riverside Publishing Company which does not endorse or attest to the accuracy of this practice test.


**ITBS PRACTICE TEST IN MATHEMATICS - KINDERGARTEN  
TEACHER EDITION**

*Teacher says: Look at the pictures. Which one is the shortest? Fill in the circle under the one that is the shortest.*



*Teacher says: You should have filled in the circle under the last picture. It is the shortest one in the group. Now we will do some more problems like this one. Listen to the directions and choose the best answer.*

*Teacher says: Move down to the next row. Look at the balloons. One of them is missing a number. What number goes in the balloon? Fill in the circle under the number that goes in the balloon.*

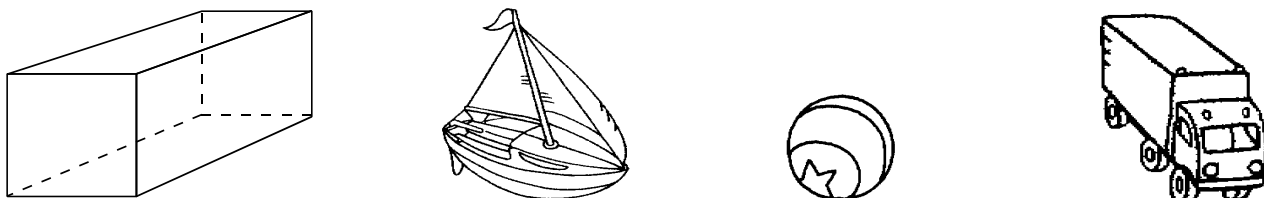


- |    |                       |                       |                       |
|----|-----------------------|-----------------------|-----------------------|
|    | 6                     | 8                     | 9                     |
| 1. | <input type="radio"/> | <input type="radio"/> | <input type="radio"/> |

*Teacher says: Move down to the next row. If you were counting, which number would come just before 16? Fill in the circle under the number that comes just before 16.*


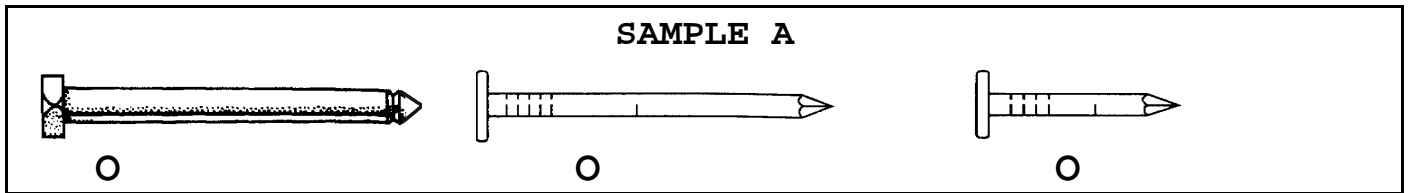
- |    |                       |                       |                       |
|----|-----------------------|-----------------------|-----------------------|
|    | 14                    | 15                    | 17                    |
| 2. | <input type="radio"/> | <input type="radio"/> | <input type="radio"/> |

*Teacher says: Move down to the next row. Which toy is shaped most like the picture at the beginning of the row? Fill in the circle under the toy that is shaped most like the picture at the beginning of the row.*



- |    |                       |                       |                       |
|----|-----------------------|-----------------------|-----------------------|
| 3. | <input type="radio"/> | <input type="radio"/> | <input type="radio"/> |
|----|-----------------------|-----------------------|-----------------------|

ITBS PRACTICE TEST IN MATHEMATICS - KINDERGARTEN  
STUDENT EDITION



1.                      6                                      8                                      9  
○                                      ○                                      ○

2.                      14                                      15                                      17  
○                                      ○                                      ○

