

*SKILLS LIST and SAMPLE TEST ITEMS*

*FOR*

**PRACTICE TEST FOR MATHEMATICS, GRADE 2**

*(Test items developed for skills measured in ITBS\*)*

---

*Skills*

1.0 Math Concepts

- 1.1 Numeration and Number Systems
- 1.2 Whole Numbers
- 1.3 Geometry
- 1.4 Measurement
- 1.5 Fractions
- 1.6 Currency
- 1.7 Number Sentences
- 1.8 Computational Estimation

3.0 Computation

- 3.1 Addition
- 3.2 Subtraction

2.0 Problem Solving

- 2.1 Solve Word Problems
- 2.2 Locate Data
- 2.3 Compare Amounts
- 2.4 Develop Generalizations

---

Number of questions: 91

Number of pages: TE=23; SE=18

Approximate testing time: 70 minutes


© EPES TESTING, INC.

(OVER)

\*The Iowa Test of Basic Skills is published by The Riverside Publishing Company which does not endorse or attest to the accuracy of this practice test.

ITBS PRACTICE TEST FOR MATHEMATICS - GRADE 2 - FORM B  
TEACHER EDITION

Teacher says: This is a math test. After I read each question, fill in the circle by the best answer. Look at Sample A. Which picture is worth the most money? A penny, a nickel, a dime, or a quarter? Fill in the circle under the correct answer.



Teacher says: A quarter is worth the most money. You should have filled in the circle under the "quarter." Now I will read each question. This time fill in the circle beside the correct answer.

Teacher says: Look at the number sentence. Find the number that goes in the box to make the sentence true. Fill in the circle beside your answer.

_____ > 44
------------

1.    6                       36                       66                       20
- 

Teacher says: Look at the numbers. Find the number that is between 39 and 60.

2.    51                       62                       35                       65
- 

Teacher says: Look at the numbers. Fill in the circle beside the number five hundred sixty-one.

3.    561                       5610                       50,061                       50,601
-

ITBS PRACTICE TEST FOR MATHEMATICS - GRADE 2 - FORM B  
STUDENT EDITION

SAMPLE A

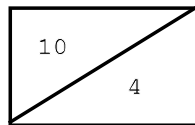
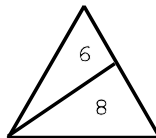


\_\_\_\_\_ > 44

1.  6                       36                       66                       20
- 

2.  51                       62                       35                       65
- 

3.  561                       5610                       50,061                       50,601
- 



4.  16                       18                       10                       12
- 

5.  47                       74                       740                       704
-