

SKILLS LIST and SAMPLE TEST ITEMS

FOR

PRACTICE TEST FOR MATHEMATICS, GRADE 1
(Test items developed for skills measured in ITBS FORM B)*

Skills

- 1.0 Mathematics Concepts
 - 1.1 Numeration and Number Systems
 - 1.2 Whole Numbers
 - 1.3 Geometry
 - 1.4 Measurement
 - 1.5 Fractions
 - 1.6 Currency
 - 1.7 Number Sentences
 - 1.8 Computational Estimation
 - 2.0 Problem Solving
 - 2.1 Solve Word Problems
 - 2.2 Locate Data
 - 2.3 Compare Amounts
 - 2.4 Develop Generalizations
 - 3.0 Mathematics
 - 3.1 Addition
 - 3.2 Subtraction
-

Number of questions: 83

Number of pages: TE= 18; SE= 14

Approximate testing time: 70 minutes

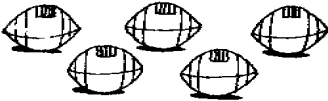


(c) EPES TESTING, INC.

(OVER)

ITBS PRACTICE TEST IN MATHEMATICS- GRADE 1 - FORM B
TEACHER EDITION

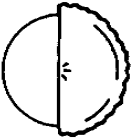

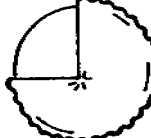
Teacher says: Megan and her mom went shopping for presents for her cousins. They found lots of good things. Megan's mom said they had to get the same thing for all of her boy cousins. They bought the toy that the store had the most of. Look at the pictures in the box. If they bought the toy the store had the most of, which toy did they buy? Fill in the circle under the toy that they bought.

SAMPLE 1

		
<input type="radio"/>	<input type="radio"/>	<input type="radio"/>

Teacher says: You should have filled in the circle under the baseballs. The store had the most baseballs, and that is what Megan and her mom bought.

Teacher says: Move down to Number 1. Brandon and his dad ate one half of the apple pie. Find the picture that shows what the pie looked like when they were finished.

		
1. <input type="radio"/>	<input type="radio"/>	<input type="radio"/>

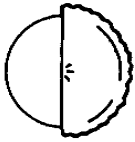
Teacher says: Look at the word in the box below. It is the name for a number. Fill in the circle beside the number that the word means.

Fifteen

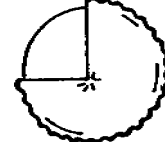

2. <input type="radio"/> 5	<input type="radio"/> 15	<input type="radio"/> 50
----------------------------	--------------------------	--------------------------

ITBS PRACTICE TEST IN MATHEMATICS- GRADE 1 - FORM B
STUDENT EDITION

SAMPLE 1



1.




Fifteen

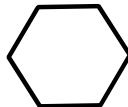
2. 5

15

50



3.



$$3 + 2 + \square = 9$$

4. 4

5

3