

SKILLS LIST and SAMPLE TEST ITEMS

FOR

PRACTICE TEST FOR MATHEMATICS, GRADE 4

(Test items developed for skills measured in GA03)

Skills

- | | | | |
|-----|---|-----|---|
| 1.0 | Number Sense and Numeration | 4.0 | Statistics and Probability |
| 1.1 | Fundamental Characteristic | 4.1 | Collects, Organizes, and Displays Data |
| 1.2 | Place Value | 4.2 | Interprets and Draws Conclusions from Data |
| 1.3 | Properties of Numbers | 4.3 | Probability |
| 1.4 | Fractions/Decimals | 4.4 | Determines Mean and Median |
| 2.0 | Geometry and Measurement | 5.0 | Computation and Estimation |
| 2.1 | Characteristics of Shapes, Sorting, Classifying Plane and Solid Figures | 5.1 | Properties of Addition and Multiplication |
| 2.2 | Appropriate Units/Instruments | 5.2 | Operations in Computation and Problem Solving |
| 2.3 | Coordinate Graphs | 5.3 | Estimation and Mental Computation |
| 3.0 | Patterns and Relationships | 6.0 | Problem Solving |
| 3.1 | Number Relations | 6.1 | Interprets Data/Constructs Appropriate Graphs |
| 3.2 | Predicts and Completes Patterns | 6.2 | Problem Solving Strategies |
| 3.3 | Missing Terms and Rules for Patterns | | |
| 3.4 | Recognizes, Describes, and Generalizes Patterns and Sequences | | |

Number of questions: 60

Number of pages: 15

(c) EPES TESTING, INC.

(OVER)

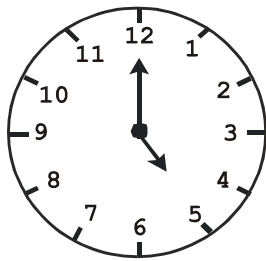
GA03 PRACTICE TEST IN MATHEMATICS - GRADE 4
FORM A

SECTION 1

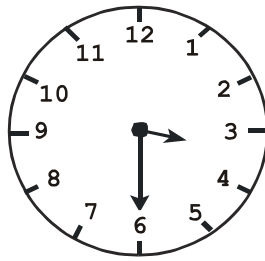
Read each question and mark the correct answer on your answer sheet. Work the sample below to see one type of problem that could be on this test. Then carefully work questions 1 through 30. Put your pencil down and sit quietly when you are done.

SAMPLE

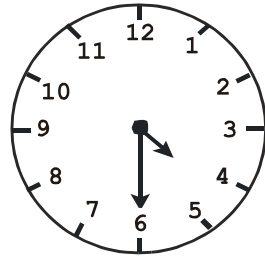
Gracie was watching her favorite television program. It came on at 4:30 and lasted one hour. Which clock shows what time it was when her program went off?



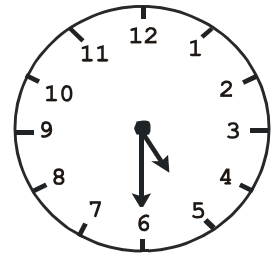
A.



B.



C.



D.

1. Which list of numbers is in order from smallest to largest?

- A. 9998, 7695, 5437, 4236
- B. 7695, 5437, 4236, 9998
- C. 4236, 5437, 7695, 9998
- D. 5437, 7695, 4236, 9998

2. What number makes the number sentence below true?

$$64 \div \square = 8$$

- A. 4
- B. 8
- C. 10
- D. 12

3. Mandy's youth group was raising money for camp. They made \$200 selling candles. They paid their \$125 deposit on camp. Then they made \$150 on a carwash. How much money do they have now?

- A. \$50
- B. \$75
- C. \$125
- D. \$225

4. Tammy was doing laundry for her mom. She found 2 quarters, 1 dime, 1 nickel, and 3 pennies. How much money did she find?

- A. 50¢
- B. 60¢
- C. 65¢
- D. 68¢