

SKILLS LIST and SAMPLE ITEMS FOR

PRACTICE TEST, SOCIAL STUDIES, GRADE 2

(Test items developed for skills measured in TERRA NOVA [CTBS]*)

Skills

- | | | | |
|-----|---|-----|---|
| 1.0 | Geography | 4.0 | Economic Perspectives |
| 1.1 | Process | 4.1 | Process Skills |
| 1.2 | Location | 4.2 | Production/Distribution/
Consumption |
| 1.3 | Human-Environment | 4.3 | Science/Technology/
Society |
| 2.0 | Historical and Cultural
Perspectives | 5.0 | Thinking Skills |
| 2.1 | Study of Time, Continuity,
and Societal Change
Throughout History | 5.1 | Generate Ideas |
| 3.0 | Civics and Government
Perspectives | 5.2 | Gather Information |
| 3.1 | Basic Concepts | 5.3 | Organize Information |
| 3.2 | Democratic Process, etc. | 5.4 | Analyze Information |
-

Number of questions: 25

Number of pages: TE=9; SE=8





Approximate testing time: 60 minutes

(c) EPES TESTING, INC.

(over)

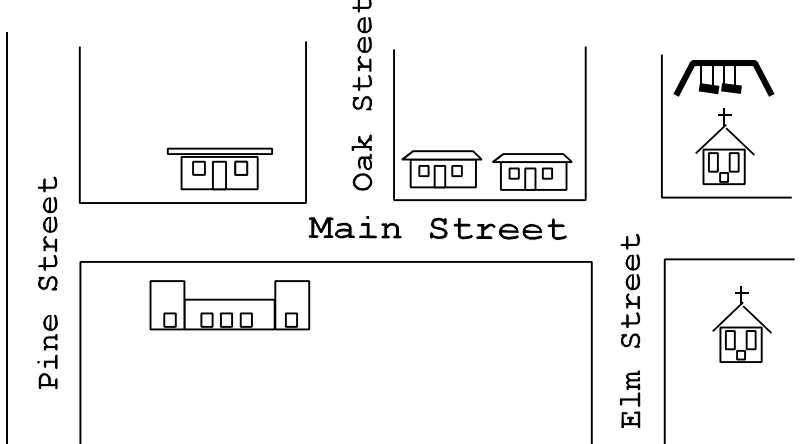




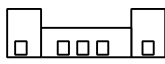










Terra Nova PRACTICE TEST IN SOCIAL STUDIES - GRADE 2 TEACHER EDITION

Teacher says: We are going to do some social studies questions. Look at Sample A. Which picture shows the holiday that was first celebrated as a feast of thanksgiving by the Pilgrims and the Indians? Fill in the circle under the answer you choose.

SAMPLE A			
			
Thanksgiving Day	Halloween	Valentine's Day	Lincoln's Birthday
<input type="radio"/>	<input type="radio"/>	<input type="radio"/>	<input type="radio"/>

Teacher says: You should have filled in the first circle. It shows the holiday that was first celebrated as a feast of thanksgiving by the Pilgrims and the Indians.

Teacher says: Look at the map and the key. It shows a neighborhood. You will use this map to answer Numbers 1, 2, and 3.

		<p>Map Key:</p> <table style="width: 100%; border: none;"> <tr> <td style="text-align: center;"></td> <td>Park</td> </tr> <tr> <td style="text-align: center;"></td> <td>Church</td> </tr> <tr> <td style="text-align: center;"></td> <td>Houses</td> </tr> <tr> <td style="text-align: center;"></td> <td>School</td> </tr> <tr> <td style="text-align: center;"></td> <td>Shopping Center</td> </tr> </table>		Park		Church		Houses		School		Shopping Center
	Park											
	Church											
	Houses											
	School											
	Shopping Center											

Teacher says: Find Number 1. Look at the map and key. Which word tells what street the park is on?

1. Pine Oak Main Elm

Teacher says: Find Number 2. Look at the map. Which of the following is the closest to the park?

2. the school the shopping center
 the houses the church

