

SKILLS LIST and SAMPLE ITEMS

FOR

PRACTICE TEST FOR MATHEMATICS, GRADE 3

(Test items developed for skills measured in OCCT)

Skills

- | | |
|---------------------------------|-----------------------------------|
| 1.0 Patterns | 4.0 Geometry |
| 1.1 Algebra Patterns | 4.1 Spatial Reasoning |
| 1.2 Problem Solving | 4.2 Measurement |
| 2.0 Number Sense | 4.3 Time and Temperature |
| 2.1 Place Value | 5.0 Data Analysis and Probability |
| 2.2 Whole Numbers and Fractions | 5.1 Data Analysis |
| 3.0 Operations and Computation | 5.2 Probability |
| 3.1 Estimation | |
| 3.2 Multiplication | |
| 3.3 Money Problems | |
-

Number of questions: 45

Number of pages: 12

(c) EPES TESTING, INC.

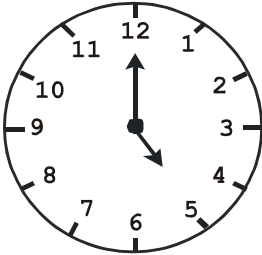
(OVER)

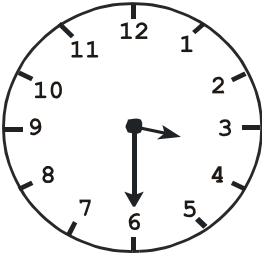
**OCCT PRACTICE TEST IN MATHEMATICS - GRADE 3
FORM A**

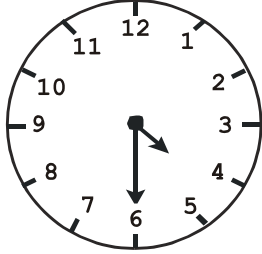
DIRECTIONS: Read each question and mark the correct answer on your answer sheet. Work the sample below to see one type of problem that could be on this test. Then carefully work the questions.

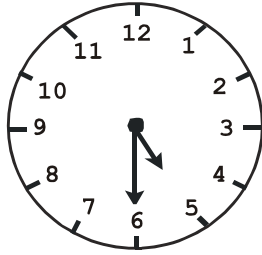
SAMPLE

Gracie was watching her favorite television program. It came on at 4:30 and lasted one hour. Which clock shows what time it was when her program ended?

A.


B.


C.


D.


1. A recent survey showed that the Korean population in Oklahoma was five thousand, seventy-four. Which number shows five thousand, seventy-four?

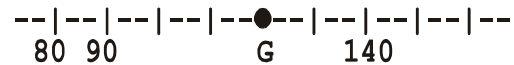
- A. 5,074
- B. 50,704
- C. 500,074
- D. 574,000

2. Estimate the sum.

$$\begin{array}{r} 29 \\ +38 \\ \hline \end{array}$$

- A. 50
- B. 60
- C. 70
- D. 80

3. What number is represented by the G on the line?



- A. 100
- B. 110
- C. 120
- D. 130