

**SKILLS LIST and SAMPLE ITEMS FOR**  
**PRACTICE TEST FOR MATHEMATICS, GRADE 2 - FORM B**  
(Test items developed for skills measured in MCT)

---

**Skills**

- |                                 |  |
|---------------------------------|--|
| 1.0 Number Sense                | 4.0 Data Analysis, Prediction                  |
| 1.1 Number Meaning              | 4.1 Collecting, Organizing,<br>Describing Data |
| 1.2 Addition and Subtraction    | 4.2 Probability                                |
| 1.3 Multiplication              | 5.0 Algebra                                    |
| 2.0 Geometry                    | 5.1 Addition and Subtraction                   |
| 2.1 Shapes                      | 5.2 Patterns                                   |
| 2.2 Perimeter                   |  |
| 3.0 Measurements                |  |
| 3.1 Standard/Non-Standard Units |  |
| 3.2 Time                        |  |
| 3.3 Money                       |  |
- 

Number of questions: 50  
Number of pages: 11

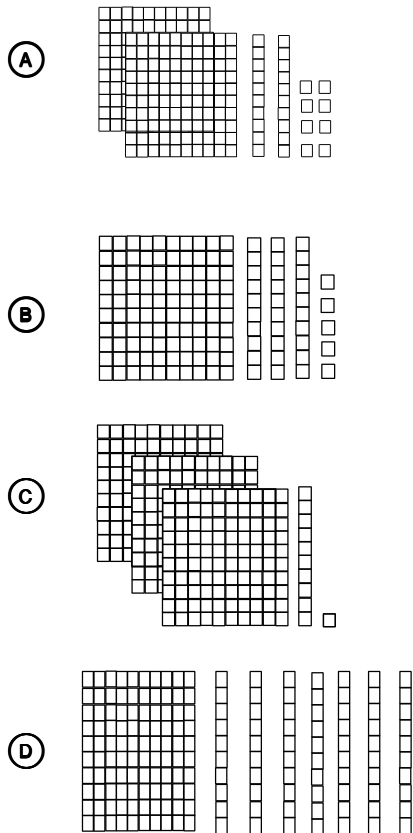
(c) EPES TESTING, INC.

(OVER)


# MCT PRACTICE TEST IN MATHEMATICS - GRADE 2 - FORM B

*Directions: Read each question and fill in the circle by the correct answer.*

1. Which picture shows the number 228?



2. About how many stars are in both groups together?



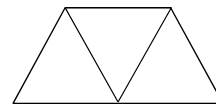
- (A) 10
- (B) 20
- (C) 30
- (D) 40

3. Which number completes the number sentence below?

$$7 + \square = 21$$

- (A) 7
- (B) 14
- (C) 15
- (D) 16

4. Which fraction is equivalent to the first fraction shown below?



- (A)
- (B)
- (C)
- (D)

5. What is the place value of the 8 in the number below?

7894

- (A) ones
- (B) tens
- (C) hundreds
- (D) thousands