

SKILLS LIST and SAMPLE TEST ITEMS

FOR

PRACTICE TEST FOR SOCIAL STUDIES, GRADE 1

(Test items developed for skills measured in ITBS03)

Skills

- | | |
|-----------------------|------------------------|
| 1.0 History | 4.0 Government |
| 1.1 Culture | 4.1 Social Structure |
| 1.2 Change/Chronology | 4.2 Rules |
| 2.0 Geography | 4.3 Citizenship |
| 2.1 Land | 5.0 Maps/Diagrams |
| 2.2 Human/Environment | 5.1 Locate Information |
| 3.0 Economics | 5.2 Interpretation |
| 3.1 Work | 6.0 Thinking Skills |
| 3.2 Needs/Wants | 6.1 Social Studies |
| 3.3 Technology | 6.2 Maps/Diagrams |
| 3.4 Interdependence | |

Number of questions: 42

Number of pages: TE=7; SE=11

Approximate testing time: 42 minutes

(c) EPES TESTING, INC.

(OVER)

ITBS03 PRACTICE TEST IN SOCIAL STUDIES - GRADE 1
TEACHER DIRECTIONS - FORM A

Teacher says: Look at Sample A on page 1. Look at the different pictures. Which picture shows something that represents our country? Fill in the circle under the correct picture.

Wait while students choose the answer.

Teacher says: Which circle did you fill in? Yes, that's right. You should have filled in the first circle under the picture of the flag. We use a flag to represent our country. Do you have any questions?

Now we are going to do some more like these. Listen carefully as I read each question. Then fill in the circle under the best answer.

Look at Number 1. Look at the three pictures. Which one shows something that is a very expensive natural resource? Fill in the circle that shows something that is a very expensive natural resource.

Look at Number 2. Which picture shows a machine that made moving large amounts of manufactured goods quicker and easier? Fill in the circle under the machine that made moving large amounts of manufactured goods quicker and easier.


Look at Number 3. Look at the three pictures. Which building shows a place where many different people work and is usually found in a city? Fill in the circle under the picture that shows a place where many different people work and is usually found in a city.

Teacher says: Go to page 2. Look at Number 4. Look at the three pictures. Which one shows one way people can keep up with local news? Fill in the circle under the picture that shows one way people can keep up with local news.

Look at Number 5. Look at the three pictures. Which picture shows something people might do to celebrate the birthday of our nation? Fill in the circle under the picture that shows something people might do to celebrate the birthday of our nation.

ITBS03 PRACTICE TEST IN SOCIAL STUDIES - GRADE 1
STUDENT EDITION - FORM A

SAMPLE A



(A)



(B)



(C)

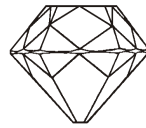
1.



(A)




(B)

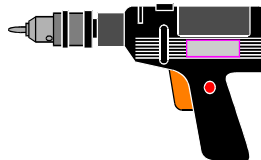


(C)


2.



(A)



(B)




(C)


3.



(A)



(B)



(C)