

*SKILLS LIST and SAMPLE TEST ITEMS*

*FOR*

**PRACTICE TEST FOR SCIENCE, GRADE 4**

*(Test items developed for skills measured in ITBS03)*

---

*Skills*

- |     |                     |     |                         |
|-----|---------------------|-----|-------------------------|
| 1.0 | Life Science        | 3.0 | Physical Science        |
| 1.1 | Living Things       | 3.1 | Motion/Forces/Mechanics |
| 1.2 | Life Cycles         | 3.2 | Energy                  |
| 1.3 | Environment         | 3.3 | Matter                  |
| 2.0 | Earth/Space Science | 4.0 | Scientific Inquiry      |
| 2.1 | Structure           | 4.1 | Skills/Processes        |
| 2.2 | Changes             | 4.2 | Analysis                |
| 2.3 | Universe            | 5.0 | Thinking Skills         |
|     |                     | 5.1 | Science                 |

---

Number of questions: 34

Number of pages: 8

Approximate testing time: 30 minutes

(c) EPES TESTING, INC.


(OVER)


**ITBS03 PRACTICE TEST IN SCIENCE - GRADE 4  
FORM A**


**DIRECTIONS:** Read the following questions and mark the correct answer.


**SAMPLE**

Which of these organisms is made of only one cell?

A. 

B. 

C. 

D. 

2.



In what direction do weather fronts move across the map?

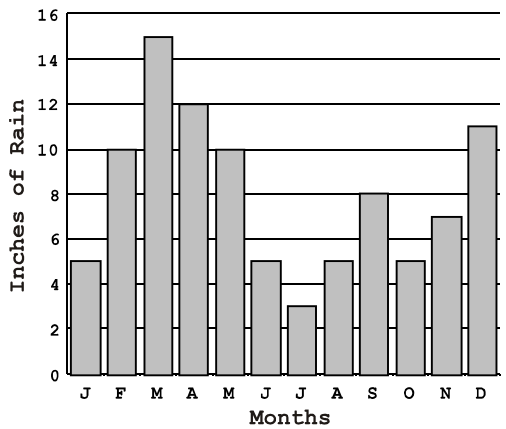
- A. Toward the north
- B. Toward the south
- C. Toward the east
- D. Toward the west

3.

Which is the best way to check the boiling points of substances?

- A. Heat all substances in different size pans
- B. Heat all substances at the same rate
- C. Heat all substances in different amounts
- D. Heat all substances in different types of containers

1. Average Monthly Precipitation in Little Rock






In which month would the people of Little Rock not have to conserve water?

- A. December
- B. January
- C. February
- D. March

4.

Which box will be the easiest to move?

- A. 
- B. 
- C. 
- D. 