

SKILLS LIST and SAMPLE TEST ITEMS

FOR

PRACTICE TEST FOR SCIENCE, GRADE 5

(Test items developed for skills measured in ITBS FORM B)*

Skills

1.0 Life Science

- 1.1 Explain
- 1.2 Infer
- 1.3 Hypothesis
- 1.4 Classify

2.0 Earth and Space Science

- 2.1 Explain
- 2.2 Infer
- 2.3 Hypothesis
- 2.4 Classify

3.0 Physical Science

- 3.1 Explain
- 3.2 Infer
- 3.3 Hypothesis
- 3.4 Classify

Number of questions: 40


Number of pages: 13

Approximate testing time: 30 minutes

(c) EPES TESTING, INC.

(OVER)

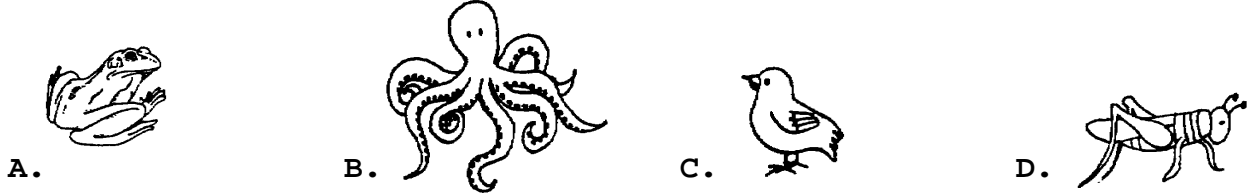
ITBS SCIENCE PRACTICE TEST - GRADE 5 - FORM B



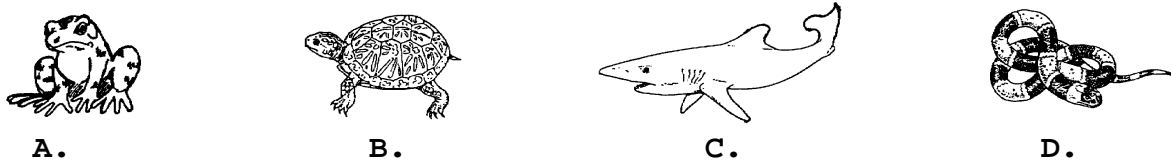
1. This picture is part of the life cycle of a

- A. butterfly B. crocodile C. frog D. fish
-

2. Which animal spends part of its life in the water and part of its life on the land?



3. Which of these animals does not use its coloring as camouflage?



4. When Marty burned trash, an aerosol can exploded causing Marty to be burned. Which safety rule should have been followed to prevent this?

- A. Keep aerosol cans away from heat.
B. Be sure campfires are out.
C. Do not play with matches.
D. Do not burn trash on a windy day.
-